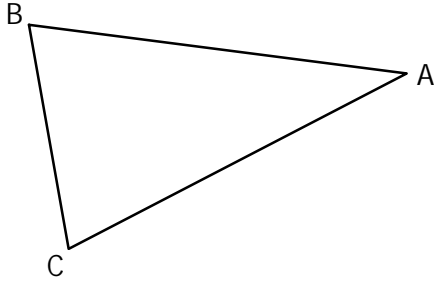


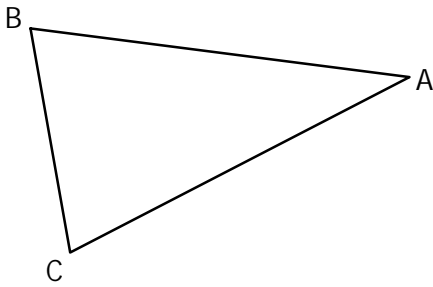
**EXERCICE 5A.1**

ABC est un triangle isocèle en A.

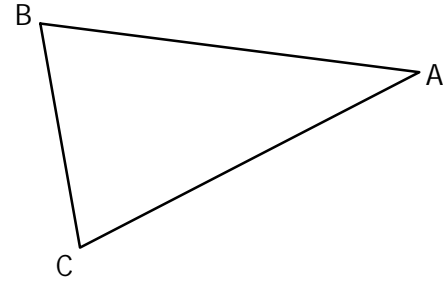
**a.** Tracer ses 3 médiatrices.



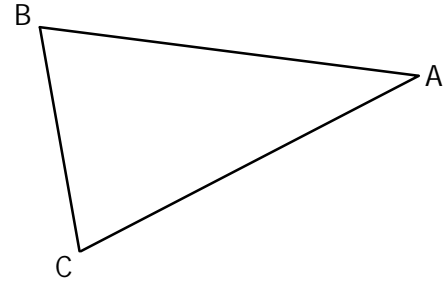
**c.** Tracer ses 3 bissectrices.



**b.** Tracer ses 3 hauteurs.

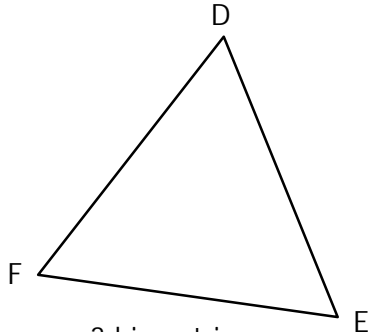


**d.** Tracer ses 3 médianes.

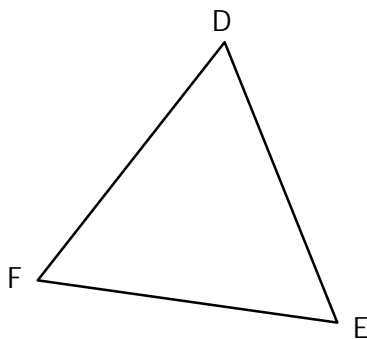
**EXERCICE 5A.2**

DEF est un triangle équilatéral.

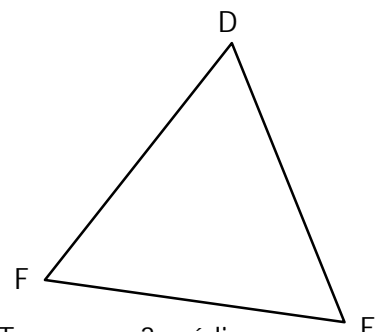
**a.** Tracer ses 3 médiatrices.



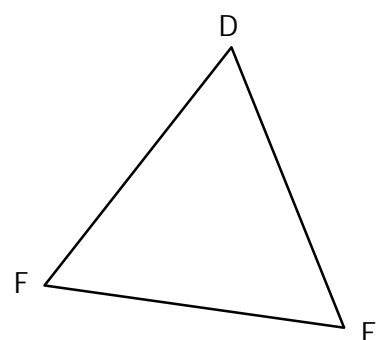
**c.** Tracer ses 3 bissectrices.



**b.** Tracer ses 3 hauteurs.

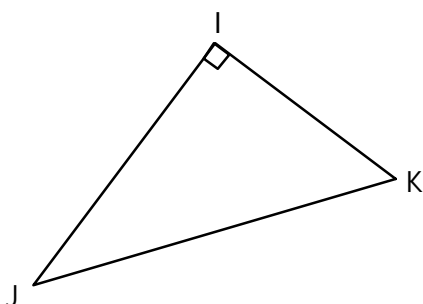


**d.** Tracer ses 3 médianes.

**EXERCICE 5A.3**

IJK est un triangle rectangle en I.

**a.** Tracer ses 3 médiatrices.



**b.** Tracer ses 3 hauteurs.

