

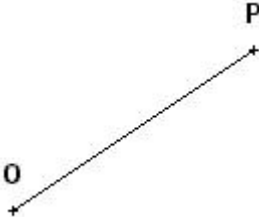



EVALUATION : (6^{ème})

Savoirs et savoir-faire testés dans cette évaluation :

TG2 03							
--------	--	--	--	--	--	--	--

Avec une règle et un compas, reproduis les segments ci dessous en laissant les traits des constructions.

 <p>A line segment with endpoints M and N. M is on the left and N is on the right, slightly lower than M.</p>	 <p>A horizontal line segment with endpoints Z and R. Z is on the left and R is on the right.</p>
 <p>A line segment with endpoints O and P. O is on the left and P is on the right and higher than O.</p>	 <p>A line segment with endpoints E and F. E is on the left and F is on the right and higher than E.</p>