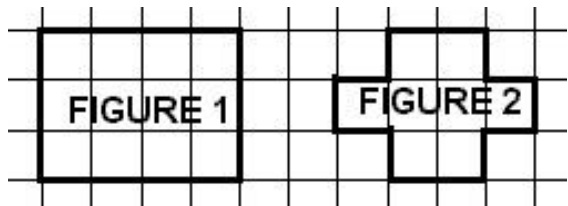
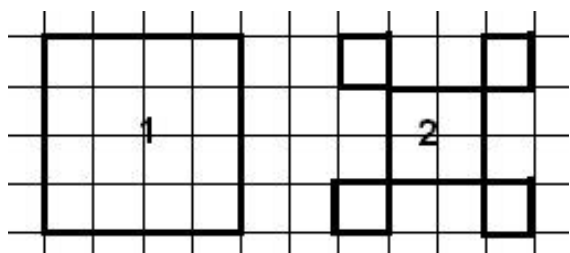


EXERCICE 1.

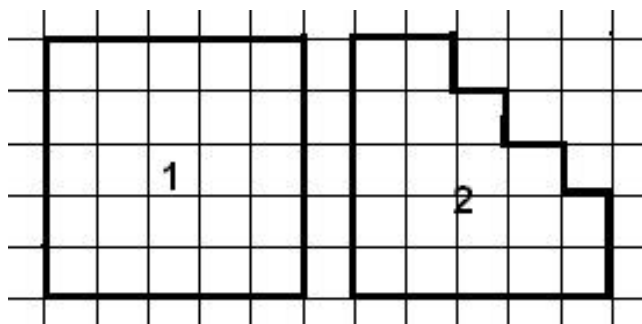
COMPLETE PAR =, < OU >



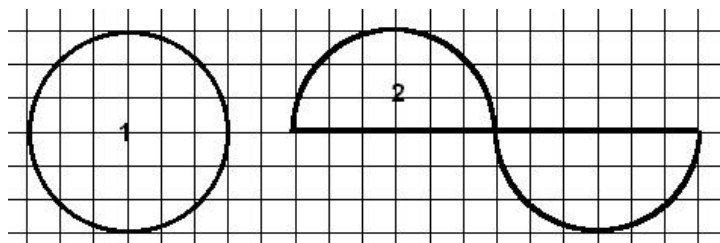
PERIMETRE 1 PERIMETRE 2



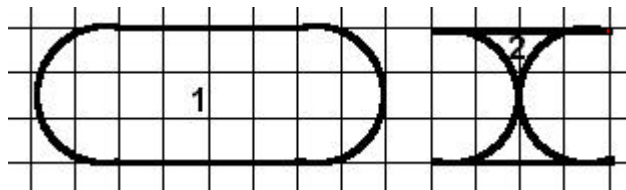
PERIMETRE 1 PERIMETRE 2



PERIMETRE 1 PERIMETRE 2



PERIMETRE 1 PERIMETRE 2



PERIMETRE 1 PERIMETRE 2

EXERCICE 2.

Calcule le périmètre de la piscine :

